

# Le figure solide

8 anni - matematica

- Collega ogni figura solida al suo nome.



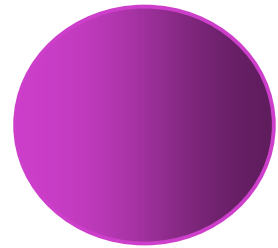

**CILINDRO**

**PRISMA**

**PARALLELEPIPEDO**

**SFERA**

**CUBO**



- Osserva i tre parallelepipedi. Qual è la dimensione che cambia?

La lunghezza

La larghezza

L'altezza

